



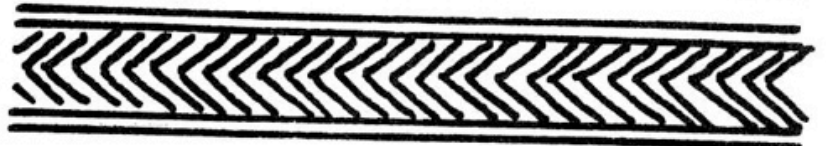
Frieze symmetry patterns

All have translations


1.		p p p p p p	Hop	Translation only
2.		p b p b p b	Step	Glide
3.		p p p p p p b b b b b b	Jump	Horizontal reflections, glides
4.		p q p q p q	Side	Vertical reflections
5.		p d p d p d	Dizzyhop	Half turns
6.		pd bq pd bq	Dizzyside	Vertical reflections, half-turns, glides
7.		p q p q p q b d b d b d	Dizzyjump	Horizontal and vertical reflections, half-turns, glides

















**Identify
which
frieze
pattern is
which.**

**Benin bronze
work
patterns
appearing on
eight arms of
one lamp.**